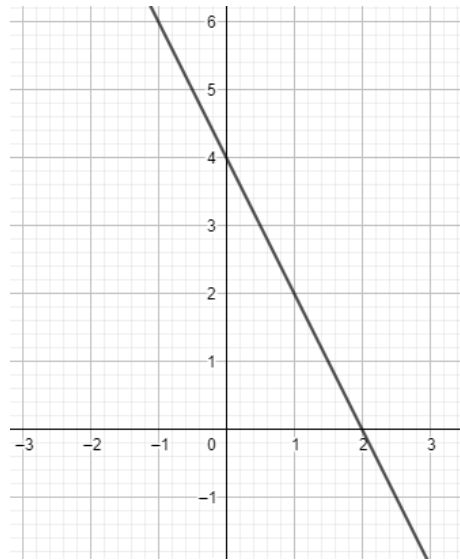
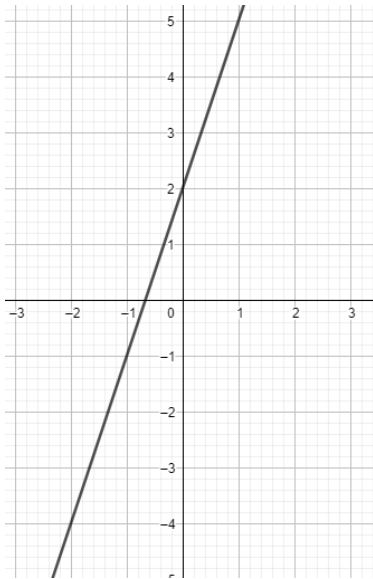
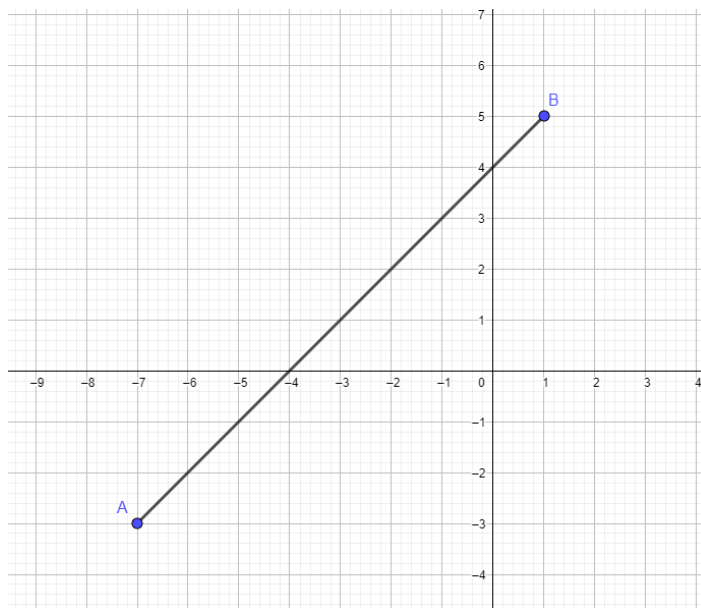


Graphs

- 1 What is the equation of these graphs?



- 2 What is the midpoint of the line segment AB?



- 3 A graph runs through the points (4,9) and (2,11). What is the equation of the graph?
- 4 A graph has a gradient of -2 and runs through the point (7,12). What is the equation of the line?
- 5 A line runs parallel to the graph $y=5x-12$. It runs through the point (7,8). What is the equation of the line?